

Prénom : .....

Date : .....

1. Transforme ces dessins en une multiplication et écris le résultat.



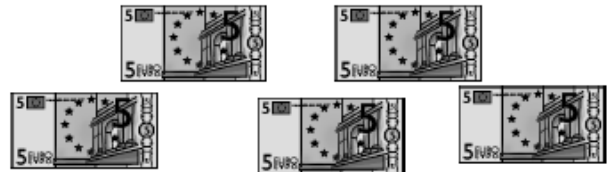
Empty box with an equals sign for the multiplication result.



Empty box with an equals sign for the multiplication result.



Empty box with an equals sign for the multiplication result.



Empty box with an equals sign for the multiplication result.



Empty box with an equals sign for the multiplication result.




Empty box with an equals sign for the multiplication result.


2. Trouve les deux multiplications.



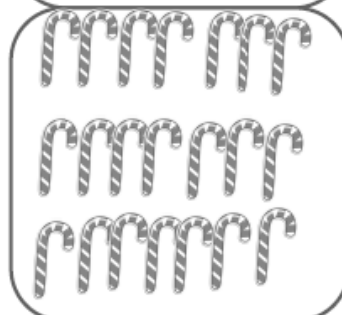
Two empty dashed boxes for writing multiplication equations.



Two empty dashed boxes for writing multiplication equations.




Two empty dashed boxes for writing multiplication equations.



Two empty dashed boxes for writing multiplication equations.



Two empty dashed boxes for writing multiplication equations.



Two empty dashed boxes for writing multiplication equations.